

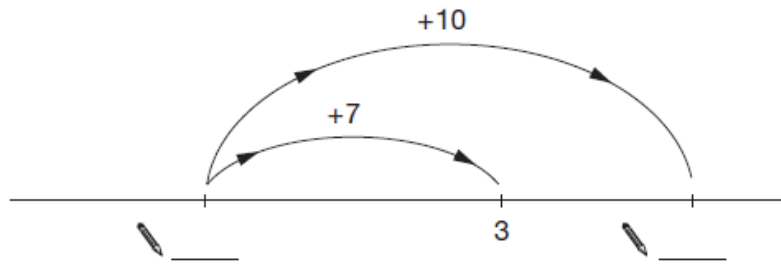
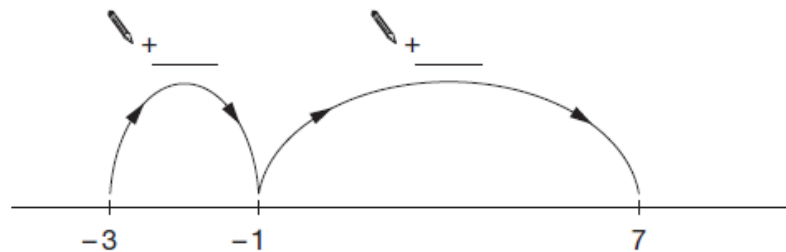
# WEEKLY MATHS QUIZ

Solve the following questions to receive a

**GOLD MERIT**

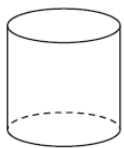
## Key Stage 3

Fill in the missing numbers:




## Key Stage 4

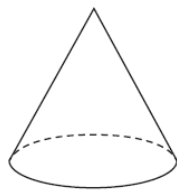
Look at the numbers below:



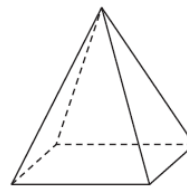
A



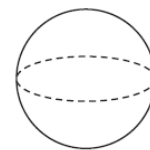
B



C



D



E

1. Which shape is a sphere?
2. What is the name of shape **A**?
3. How many faces does **B** have?
4. How many edges does **D** have?