

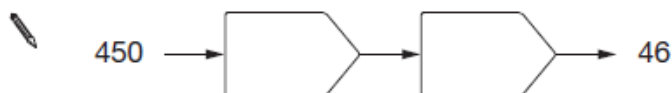
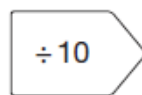
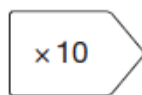
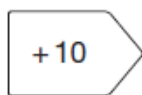
WEEKLY MATHS QUIZ

Solve the following questions to receive a

GOLD MERIT

Key Stage 3

Fill in the boxes to complete each number chain. Use any of the following:



Key Stage 4

Look at the numbers below:

17 14 16 13 9 10 17 18 16

1. What is the mode?
2. What is the median?
3. What is the range?