


WEEKLY MATHS QUIZ

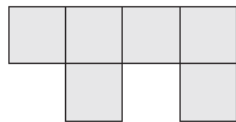
Solve the following questions to receive a

GOLD MERIT

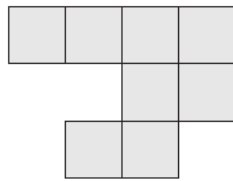
Key Stage 3



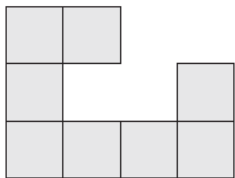
A



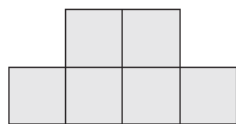
B



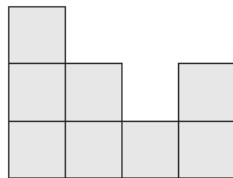
C



D



E

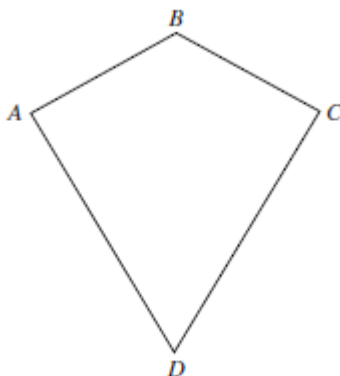


F

1. Which 2 shapes fit together to make a rectangle?
2. Which 2 shapes fit together to make a square?
3. What is the area of D?

Key Stage 4

Look at kite ABCE



True or False?

1. AB is parallel to CD
2. Angle $A =$ Angle C
3. The kite has two lines of symmetry
4. The diagonals are at right angles to each other